



NAME _____

DATE _____

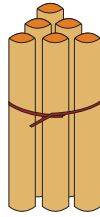
ADDITION

Count the sticks, add and write the correct number.



1

+



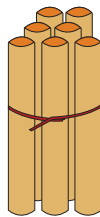
6

=



1

+



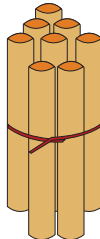
7

=



1

+



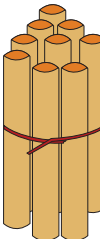
8

=



1

+



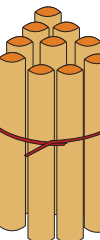
9

=



1

+



10

=